

## Entry 2: Read and use simple scales to the nearest labelled division

1. What is the length of the pencil? Include the unit.

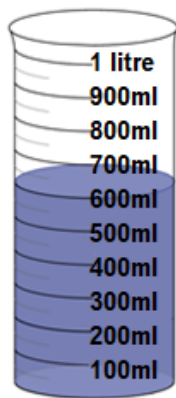


Answer: ..... cm

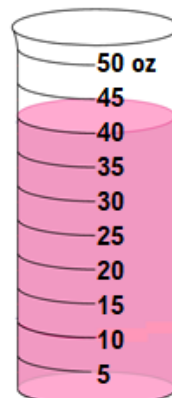
Darren has a pencil case which is 7cm long. Would the pencil above fit in it? Explain your answer.

Answer: .....

2. How much liquid is there in each of the containers? Include the unit.

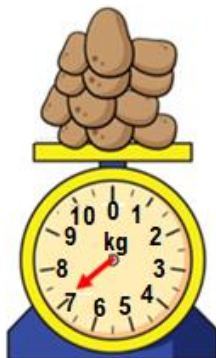


.....



.....

3. How much do each of the items below weigh? Include the unit.

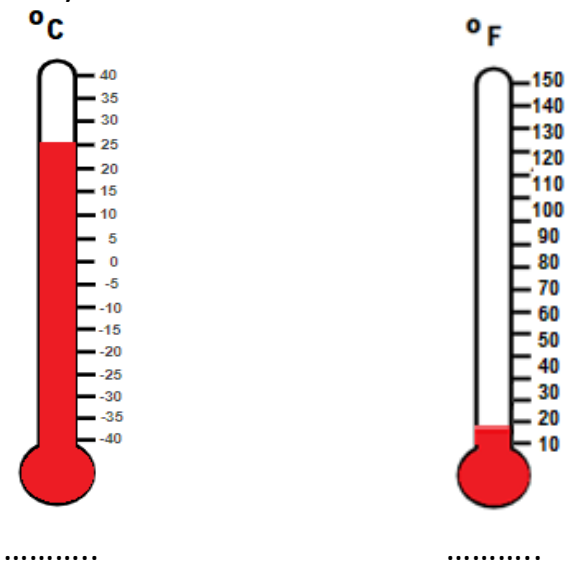


.....

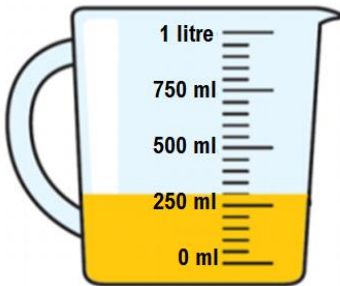


.....

4. Read the temperature shown by each thermometer. Include the unit.



5. How much juice is there in this container?



- a) About 500 ml    b) About 250 ml    c) About 1 litre    d) About 0 ml

6. How much does this bag of potatoes weigh?



Answer: .....

Anita wants to put the potatoes into containers which hold 3kg each. How many containers does she need to store all of the potatoes above?

.....